

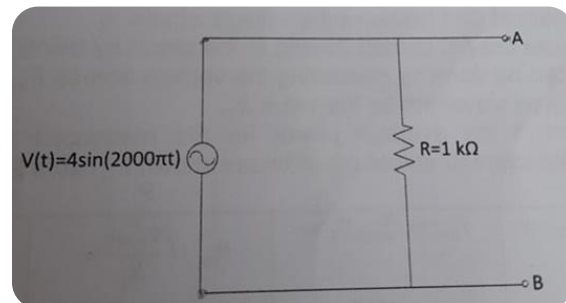
❖ Introduction

1. We Studying the basic properties of the alternating current (AC) .
2. We learned how to use the oscilloscope ,In the first circuit we used it to measure the voltage , in the second we use it to measure the current.
3. The basic parameters of AC waveform that we studied in this experiment are the peak amplitude , frequency and period.

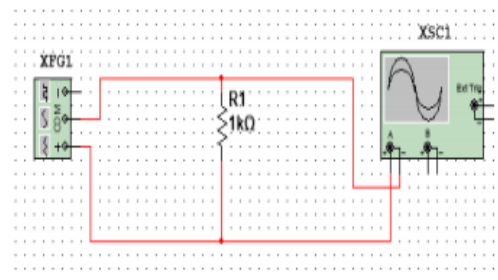

❖ Procedure

✓ Part one (using oscilloscope to measure the voltage)

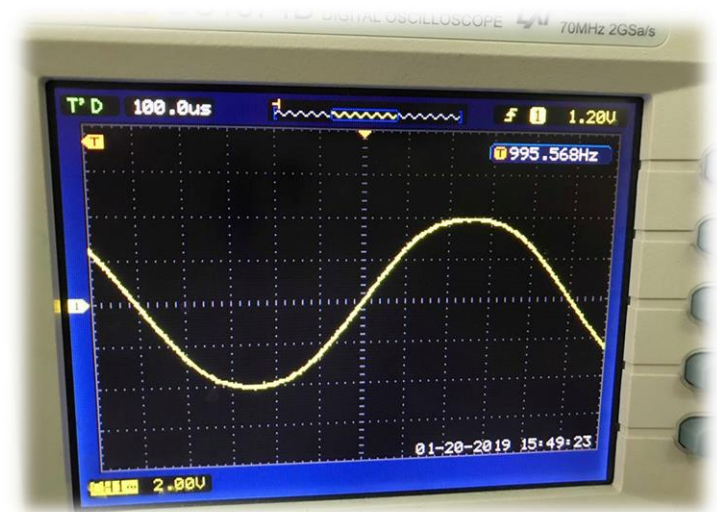
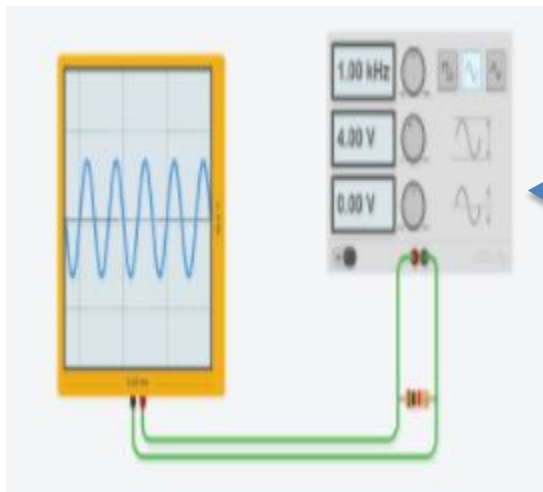
1. We connect the circuit as shown.



2. We connect channel one of the oscilloscope to point A, adjust the voltage and time scales of the oscilloscope to display one cycle of sinusoidal waveform.



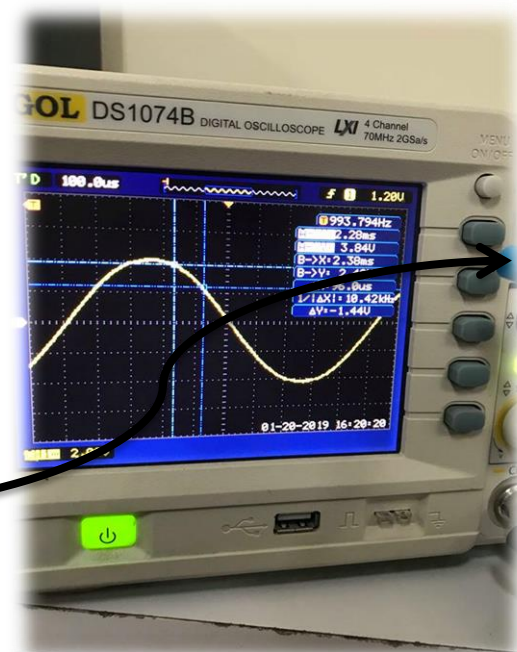
- ✓ From the screen that show the signal we can determine the basic parameters of AC waveform.(see Table 1)



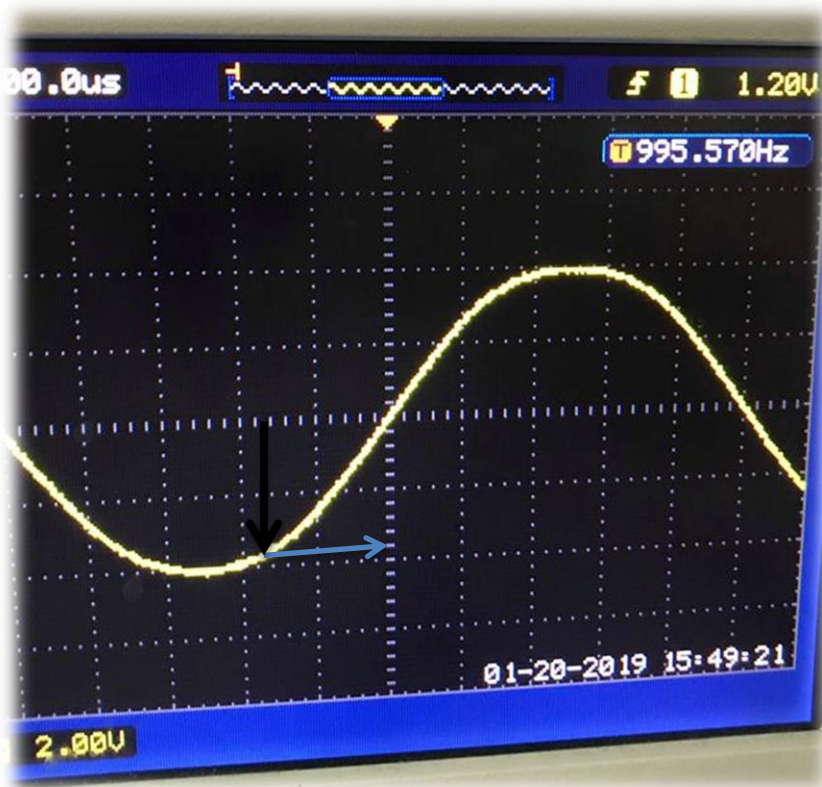
$V_p = 3.92 \text{ volt}$	$V_{pp} = 8 \text{ volt}$	$I_p = V_p / R = 0.00392 \text{ A}$	$V_{rms} = 2.77 \text{ volt}$
$I_{rms} = 2.77 \times 10^{-3}$	$T = 1 \text{ ms}$	$F = 1000 \text{ Hz}$	$\omega = 6280 \text{ rad}$
$\lambda = C \cdot f = 3 \times 10^5$	$V(t = T/3) = 3.82 \text{ volt}^*$		

Table 1

- * Notice that we can calculate the instantaneous voltage by using two methods.
 - Firstly, by measuring (Cursor), we select the cursor button and demonstrated the Indicator at one third of the period and read the value.



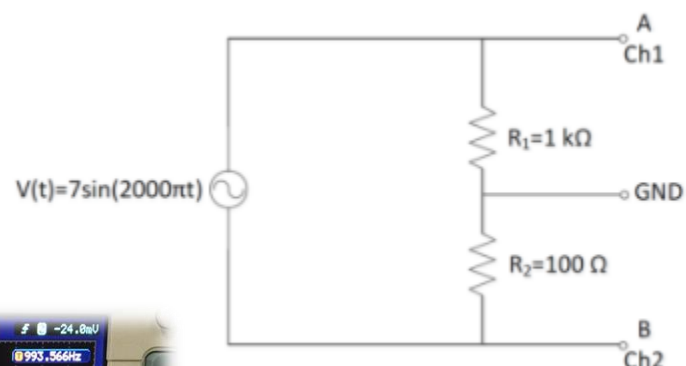

- Secondly, by calculation. We identified one-third of the period and then we read the value in the y-axis. (The default Fig explain the process).



- We find that the x-axis consist of 10 square(T) so $\frac{1}{3}$ period = $10 \div 3 = 3.3$
- Notice that each small line represent 0.2 volt
- From the Fig $v = 1.8 * 2 = 3.6$ volt

✓ Part Two (using oscilloscope to measure the current)

1. We connect the circuit as shown, on channel one we measure the voltage across R1 and channel two to measure V_{R2}



2. We determine the Avg power for the measured signals by using different power equations.

$$V_p(\text{ch1}) = 7 \text{ volt}$$

$$V_{\text{rms}}(\text{ch1}) = 7/1.4 = 4.94 \text{ volt}$$

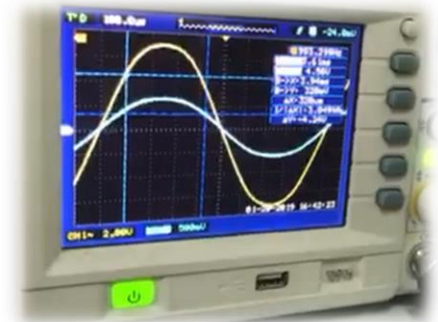
$$V_{\text{rms}}(\text{Ch2}) = 600 \text{ mV}/1.4 = 424.26 \text{ mV}$$

$$I_{\text{rms}} = 424.26 \text{ mV}/100 = 0.00424 \text{ A}$$

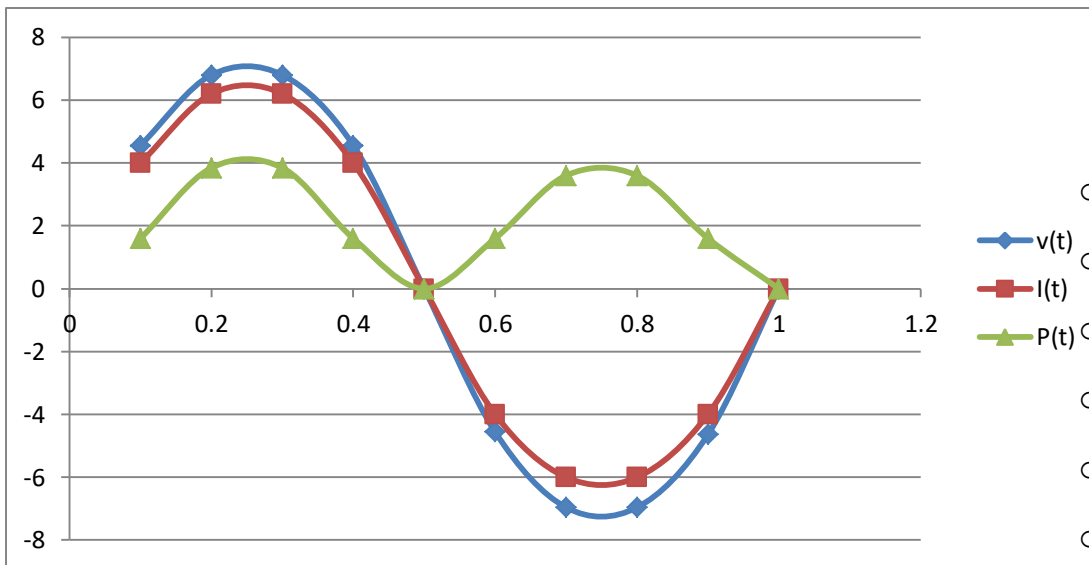
$$I_p = 600 \text{ mV}/100 = 0.006 \text{ A}$$

$P_{\text{av}} = V_{\text{rms}} * I_{\text{rms}}$ $= 4.94 * 0.0042 = 0.021 \text{ watt}$	$P_{\text{av}} = I^2 * R_1$ $0.0042^2 * 1000 =$ 0.0179 watt	$P_{\text{av}} = v^2 / R_1$ $= 0.0244 \text{ watt}$	$P_{\text{av}} = 0.5 * V_p * I_p$ $= 0.006 * 7 * 0.5$ $= 0.021 \text{ watt}$
---	---	--	--

3. We Compute the instantaneous power at different time instants.



Time (ms)	Instantaneous Voltage (V)	Instantaneous Current (mA)		Instantaneous P (mW)
		V100Ω mV	I=v/100 mA	
0.1	4.56	400	4	1.6
0.2	6.8	620	6.2	3.844
0.3	6.8	620	6.2	3.844
0.4	4.56	400	4	1.6
0.5	0	0	0	0
0.6	-4.56	-400	-4	1.6
0.7	-6.96	-600	-6	3.6
0.8	-6.96	-600	-6	3.6
0.9	-4.64	-400	-4	1.6
1	0	0	0	0



- The previous plots show the relationship between v, i and p with versus time

❖ Conclusion

At this experiment we learned about AC Current & voltage .

We used Oscilloscope to measure the voltage and current by the signal which it gave , it give us the voltage signal , then we can find the current by Ohm Law. Moreover , we measured the Instantaneous voltage and current cross circuit , we plot the result on a graph , we can noticed that the power must be positive in any time .